



# DELHI PUBLIC SCHOOL RAMPURHAT

FINAL-TERM EXAMINATION

SESSION: 2024-2025

SUBJECT: ENGLISH

CLASS – II

Name:

Sec:

Roll No:

Invigilator's Sign:

Examiner's Sign:

Time Allowed: 2 Hrs 15 Mins

Max. Marks: 50

### General Instructions:

(i) First 15 minutes are allowed only for reading the question paper.

Students must NOT start writing during this time.

(ii) This question paper consists of 4 printed pages.

### SECTION A - WRITING

1. Write a Short Paragraph on GOOD MANNERS:

(5X1=5)

---



---



---



---



---



---



---



---

### SECTION -B ENGLISH LANGUAGE

2. Fill in the blanks with the correct nouns given below:

(1X5=5)

( taxi, king, kite, kangaroo, tailor, jug, sister, jam, policeman, house, water)

a) The \_\_\_\_\_ is standing on the road.

b) The \_\_\_\_\_ is sewing a dress.

- c) The \_\_\_\_\_ in the jug was cold.  
d) The \_\_\_\_\_ is waiting outside the house.  
e) I saw a \_\_\_\_\_ in the zoo.

**3. Fill in the blanks with the correct words: (1X3=3)**

- a) \_\_\_\_\_ am going to the park to play. (They/I)  
b) Today, \_\_\_\_\_ are coming to my house to play. (they/you)  
c) Radha is a good dancer. \_\_\_\_\_ dances in the school function. (She/I)

**4. Fill in Blanks with I, we, you, he, she, it or they: (1X2=2)**

- a) Mohan do \_\_\_\_\_ like mangoes?  
b) Mahesh and Sonam should sleep now. \_\_\_\_\_ should not be naughty and stay up late

**5. Write the opposites of the following words: (1X5=5)**

- a) Forget -  
b) Heavy -  
c) Outside -  
d) Entry -  
e) Obey -

**6. Write the Plural or Singular of the following words: (1X2=2)**

- a) Bag -  
b) Children -

**7. Underline the Doing Words (VERBS) in the following sentences: (1X3=3)**

- a) Miss Priya teaches us English.  
b) The policeman chases the thief.

**SECTION C - ENGLISH LITERATURE**

**8) Answer the following questions: (2X5=10)**

- a) What did the children help Mummy to do?

Ans \_\_\_\_\_

b) Whom did Gappu and Gunnu first go to for help?

Ans) \_\_\_\_\_

c) What did Rahul's mother write to grandma?

Ans) \_\_\_\_\_

d) What feature does the green Chick have?

Ans) \_\_\_\_\_

e) What kind of a story is Chicken Little?

Ans) \_\_\_\_\_

**9) Identify the correct Poem and Fill up the blanks:(1X5=5) [ 1/2+1/2=1) for 2 blanks in one sentence:**

She \_\_\_\_\_ seashells, by the \_\_\_\_\_.

She \_\_\_\_\_ and \_\_\_\_\_, oh what a sight.

I put him in the \_\_\_\_\_.

With \_\_\_\_\_ in his throat.

All of these chick live at the \_\_\_\_\_.

**10. Who Said to Whom:**

**(1X5=5)**

a) "The sky is falling Goosey Loosey"

\_\_\_\_\_.

b) " We will run, we will run and tell the king "

\_\_\_\_\_.

c) " How do you know Goosey Loosey "

---

d) "I have become the principal of my school"

---

e) "Hello Cave! Hello Cave! Can I come inside? "

---

**11. State True Or False :**

**(1X5=5)**

a) The Jackal thought of a plan -

b) Some children had brought their cats with them -

c) King Lion saw a big mango lying on the ground -

d) Lord Rama lost the war against Ravana -

e) In the end, Gajraj the elephant moved the tree



Marks Obtained

# Delhi Public School, Rampurhat

MID -TERM EXAMINATION

SESSION: 2024-2025

SUBJECT: BENGALI (2<sup>nd</sup> Language)

CLASS – II

Time Allowed: 2 Hours 15 Mins

Max. Marks: 50

NAME :

SECTION :

ROLL NO. :

DATE :

Invigilator's Sign :

Examiner's Sign :

- (i) প্রথম 15 মিনিট শুধুমাত্র প্রশ্নপত্র পড়ার জন্য অনুমোদিত। এই সময়ে ছাত্রছাত্রীরা লেখা শুরু করবে না।  
(ii) এই প্রশ্নপত্রটি তিনটি মুদ্রিত পৃষ্ঠা নিয়ে গঠিত।

## বিভাগ ক – ব্যাকরণ

1) সঠিক উত্তরটিতে টিক (✓) চিহ্ন দাও। (1×10=10)

- ক) 'জল' হল – (তিনটি / দশটি / বারোটি) বর্ণের শব্দ।  
খ) ব খ র – সাজালে হবে – (রখব / বখর / খবর)।  
গ) ভাষা লিখে জানালে তাকে বলে – (লেখ্যভাষা / কথ্যভাষা / কোনোটাই নয়)।  
ঘ) বর্ণের পর বর্ণ বসিয়ে তৈরি হয় – (ছবি / শব্দ / বাক্য)।  
ঙ) ধ্বনি – (দুই / তিন / চার প্রকার)।  
চ) স্বরধ্বনির চিহ্নকে বলে – (ধ্বনি / শব্দ / স্বরবর্ণ)।  
ছ) আমরা নিজের মনের ভাবনাকে প্রকাশ করি – (কথা / খেলা / খাবার) দিয়ে।  
জ) 'আমি' হল – (সাতটি / দশটি / তিনটি) বর্ণের শব্দ।  
ঝ) হ্রস্ব – দীর্ঘ ভেদ নেই – (স্বরবর্ণে / ব্যঞ্জনবর্ণে / কোনোটাই নয়)।  
ঞ) 'সে' হল – (দুটি / দশটি / বারোটি) বর্ণের শব্দ।

2) নীচে দেওয়া শব্দগুলির সঠিক বানানটিতে টিক (✓) চিহ্ন দাও। (1×5=5)

- ক) উচিৎ / উচিত / উচিত্ত  
খ) সন্দেশ / সন্দেষ / শন্দেশ  
গ) অজাগর / অজগর / অজগার  
ঘ) মুখস্ত / মূখোস্ত / মুখস্থ  
ঙ) আষাঢ় / আষার / আষাড়

3) বর্ণ বিশ্লেষণ করো। (1×5=5)

- ক) দিন =  
খ) আমোদ =

গ) মধুর =

ঘ) মামা =

ঙ) লেখক =

4) সঠিক উত্তরটি বেছে নিয়ে শূন্যস্থান পূরণ করো।

(1×5=5)

ক) বাগযন্ত্র হল \_\_\_\_\_ যন্ত্র। (কথা বলার / গান গাওয়ার / শোনার)

খ) ভাষা হল \_\_\_\_\_ বাহন। (ঘুমের / রাগের / ভাবের)

গ) শব্দের পর শব্দ বসিয়ে তৈরি হয় \_\_\_\_\_। (বর্ণ / বাক্য / ছবি)

ঘ) কথা বলার সময় সবচেয়ে বেশি নড়াচড়া করে \_\_\_\_\_। (জিভ / নাক / কান)

ঙ) মানুষের মুখের কথাকে বলা হয় \_\_\_\_\_ ভাষা। (লেখ্য / কথ্য / বর্ণমালা)

#### বিভাগ খ – সাহিত্য

5) সঠিক উত্তরটিতে টিক (✓) চিহ্ন দাও।

(1×10=10)

ক) পানতাবুড়ি সব দিন খেত – (পোলাও / পানতা ভাত / মাছ)।

খ) একবার গ্রামে এসে উপস্থিত হল এক – (রাজা / সাধু / চোর)।

গ) চোর সন্ধান পেলে বুড়ির – (পানতা ভাতের / বাগানের / সোনার)।

ঘ) ‘বর্ষার দিনে’ কবিতায় মিষ্টি বলা হয়েছে (মেঘ / রোদ / খিচুড়ি) – কে।

ঙ) ভাই – এর মত সম্পর্ক পাড়ার (ছেলে / বুড়ো / কাকা) – দের মধ্যে।

চ) ‘ফিস্টি’ শব্দের অর্থ হল (গান / কথা / চড়ুইভাতি)।

ছ) ছোটো গ্রামটি প্রাণ বাঁচিয়েছে (ফুল ও ফল / আলো ও বায়ু / মেঘ ও বৃষ্টি) দিয়ে।

জ) দরজা জানালা খোলা থাকায় ভেসে যায় (বৃষ্টি / মিষ্টি / ছিষ্টি)।

ঝ) সকালে – (সোনার / লাল / উজ্জ্বল) রবি পূব দিকে ওঠে।

ঞ) ছুরি বলল আমায় – (বাগানে / উঠোনের ঘাসে / ঘাটে) গুঁজে রাখো।

6) একটি বাক্যে উত্তর লেখো।

(1×10=10)

ক) ছোটো গ্রামটি কার সমান ?

উত্তর :

খ) গ্রামের ঘরগুলি কেমন ?

উত্তর :

গ) চাঁদের কিরণ লেগে কী কী ঝিকমিক করে ?

উত্তর :

ঘ) বৃষ্টির পরে রোদ কেমন লাগে ?

উত্তর :

ঙ) পানতাবুড়ি কার কাছে নালিশ করতে গিয়েছিল ?

উত্তর :

চ) চোরকে কার কাছে হাজির করা হয়েছিল ?

উত্তর :

ছ) বৃষ্টির দিনে কেমন হাওয়া বয় ?

উত্তর :

জ) সূচকে কোথায় রাখা হয়েছিল ?

উত্তর :

ঝ) জোরে বৃষ্টি পড়লে চারপাশ সব কেমন দেখায় ?

উত্তর :

ঞ) বড়ো বড়ো গাছগুলো কেমনভাবে আছে ?

উত্তর :

7) সঠিক উত্তরটি বেছে নিয়ে শূন্যস্থান পূরণ করো।

(1×5=5)

ক) একসাথে খেলি আর \_\_\_\_\_ যাই। (পাঠশালে / বাগানে / ঘরে)

খ) হিংসা ও \_\_\_\_\_ কভু নাহি করি। (গল্প / মারামারি / খেলা)

গ) পানতাবুড়ি খুব \_\_\_\_\_ ছিল। (গরিব / বড়লোক / পাগল)

ঘ) কুমিরের ডাক \_\_\_\_\_ ডাকের থেকেও ভয়ানক। (বিড়ালের / ছাগলের / বাঘের)

ঙ) কী খেতে চাও বলো, করি \_\_\_\_\_ লিস্টি। (হেসে / বসে / খেয়ে)



# DELHI PUBLIC SCHOOL RAMPURHAT

MID-TERM EXAMINATION

SESSION: 2024-2025

SUBJECT: HINDI

CLASS – II

NAME -

SEC-

ROLL NO-

Time Allowed: 2 Hrs 15 Mins

Max. Marks: 50

Invigilator's Sign:

Examiner's Sign:

निम्नलिखित सभी प्रश्नों के उत्तर लिखिना अनिवार्य है -  
लिखावट साफ सुथरी होनी चाहिए:

खंड - "क"

(1) प्रश्नों के उत्तर लिखिए -

(2x10=20)

(क) शाम को किसका फोन आया ?

उत्तर

(ख) कुश की बस कयों छूट गई ?

उत्तर

(ग) घर में बहुत से दाने कैसे जमा हो गए?

उत्तर

(घ) मुरगी के मुंह से दाने बाहर कैसे निकाले ?

उत्तर

---

---

---

---

(ङ) नानी बच्चों के लिए क्या बनना चाहती थी ?

उत्तर

---

---

---

---

(च) मन का वहम क्या होता है ?

उत्तर

---

---

---

---

(छ) कविता में कौन-कौन से मौसमों के बारे में बताया गया है ?

उत्तर

---

---

---

---

(ज) सरदी से बचने के लिए आप क्या-क्या पहनते हैं ?

उत्तर

---

---

---

---

(झ) राजा ने इनाम में क्या देने की बात कही थी ?

उत्तर

---

---

---

---

(ट) बच्चों के माता-पिता क्यों परेशान थे?

उत्तर

---

---

---

---

(2) लिखें- किसने, किसे कहा ?

(1x5=5)

कथन

किसने

किसे

(क) " कुश ! उठो, वरना आज भी बस छूट  
जाएगी। "

\_\_\_\_\_

\_\_\_\_\_

(ख) " मुझे दान दे, मुझे बहुत भूख लगी है। "

\_\_\_\_\_

\_\_\_\_\_

(ग) " तू अपना दाना यहीं लाकर पीस ले। "

\_\_\_\_\_

\_\_\_\_\_

(घ) " नानी भी कभी छोटी थी ? "

\_\_\_\_\_

\_\_\_\_\_

(ङ) " मैं भूत नहीं हूँ? "

\_\_\_\_\_

\_\_\_\_\_

(3) लघु प्रश्नों के उत्तर लिखिए -

(1x5=5)

(क) कुश की रूचि किस खेल में थी?

उत्तर

---

---

---

(ख) एक घर में कौन-कौन रहते थे ?

उत्तर

---

---

---

---

(ग) नानी को किसका इंतजार था ?

उत्तर

---

---

---

(घ) बरसात में कौन नाचता है ?

उत्तर

---

---

---

(ङ) बांसुरीवाला चूहों को कहां ले गया ?

उत्तर

---

---

---

---

( खंड- ख )

(4) निम्नलिखित प्रश्नों के उत्तर लिखें:

(1x5=5)

(क) दिए गए शब्द पर मात्रा लगाइए ?

उत्तर ह \_\_ थ

(ख) वाक्य में विधेय अलग करके लिखिए ?

उत्तर वाक्य - "राम दौड़ता है" विधेय \_\_\_\_\_

(ग) निम्नलिखित शब्दों को पुल्लिंग से स्त्रीलिंग में लिखिए:

उत्तर      पुल्लिंग                      स्त्रीलिंग

(1) पुत्र                      \_\_\_\_\_

(2) भाई                      \_\_\_\_\_


(3) आदमी                      \_\_\_\_\_

(4) मोर                      \_\_\_\_\_

(5) घोड़ा                      \_\_\_\_\_

(6) मामा                      \_\_\_\_\_





# DELHI PUBLIC SCHOOL RAMPURHAT

MID-TERM EXAMINATION

SESSION: 2024-2025

SUBJECT: MATHEMATICS

CLASS – II

NAME:

SEC:

ROLL No.:

Invigilator's Sign:

Examiner's Sign:

Time Allowed: 2 Hrs 15 Min

Max. Marks: 50

## General Instructions:

(i) First 15 minutes are allowed only for reading the question paper. Students must NOT start writing during this time.

(ii) This question paper consists of 4 printed pages.

## Answer the problems:

(1×10 =10)

1. 5 tens + 22 ones = \_\_\_\_\_ tens + \_\_\_\_\_ ones

2. 15 balloons + 21 balloons = \_\_\_\_\_ balloons

3. \_\_\_\_\_ 77 (Before number)

**OR**

154 \_\_\_\_\_ (After number)

4. Number

Number name

37 \_\_\_\_\_

5.  $33 \times 3 =$  \_\_\_\_\_

6. Write in ascending order: 848, 958, 768, \_\_\_\_\_, \_\_\_\_\_, \_\_\_\_\_,

7.  $8 + 8 + 8 =$  \_\_\_\_\_

8.  $4 \times 2$  \_\_\_\_\_  $6 + 4$  (Put  $>$ ,  $<$  or  $=$ )

9. A cylinder has \_\_\_\_\_ plane faces.

**OR**

A cone has \_\_\_\_\_ plane face.

10. Complete the pattern:

9, 16, 23, 30, 37, 44, \_\_\_\_\_, \_\_\_\_\_, \_\_\_\_\_

**Add or subtract.**

**(2×10 = 20)**

$$\begin{array}{r} 1. \quad 222 \\ + \quad 122 \\ \hline \end{array}$$

$$\begin{array}{r} 6. \quad 501 \\ - \quad 191 \\ \hline \end{array}$$

$$\begin{array}{r} 2. \quad 356 \\ + \quad 190 \\ \hline \end{array}$$

$$\begin{array}{r} 7. \quad 329 \\ - \quad 134 \\ \hline \end{array}$$

$$\begin{array}{r} 3. \quad 925 \\ + \quad 120 \\ \hline \end{array}$$

$$\begin{array}{r} 8. \quad 443 \\ - \quad 101 \\ \hline \end{array}$$

$$\begin{array}{r} 4. \quad 713 \\ + \quad 311 \\ \hline \end{array}$$

$$\begin{array}{r} 9. \quad 300 \\ - \quad 109 \\ \hline \end{array}$$

$$\begin{array}{r} 5. \quad 128 \\ + \quad 105 \\ \hline \end{array}$$

$$\begin{array}{r} 10. \quad 637 \\ - \quad 299 \\ \hline \end{array}$$

**Solve the following word problems.**

**(3×4 = 12)**

1. 230 mango trees, 209 coconut trees and 174 guava trees were planted in the park. How many trees were planted in all?

**OR,**

Joseph sold 213 apples, 120 pears and 237 oranges. How many fruits did he sell in all?

Ans.

2. From January to June 2020, a shop sold 450 books. From July to December 2020, they sold 350 books. How many books did they sell in the year 2020?

Ans.

3. Ria read 335 pages on Monday and 239 pages on Tuesday. How many more pages did Ria read on Monday?

Ans.

4. A toy store sold 165 toys in the afternoon. The shopkeeper had 310 toys when he opened the shop in the morning. How many toys does he have now?

**OR,**

567 ants were in an ant hole. 179 left the ant hole in search of food. How many were left inside?

Ans.

**Answer the questions.**

**(4×2 =8)**

1. There are 6 houses on a small street. Each house has a family with 4 children, 2 cats and 1 dog.

A. How many children are there living on this street?

B. How many pets are there living on this street?

**(2+2)**

Ans.

2. Complete the table.

**(1+1+1+1)**

<b>Shape</b>	<b>Sides</b>	<b>Corners</b>
Circle		
Triangle		



# DELHI PUBLIC SCHOOL RAMPURHAT

MID-TERM EXAMINATION

SESSION: 2024-2025

SUBJECT: EVS

CLASS – II

NAME-

SEC-

ROLL.NO-

Invigilator's sign:

Examiner's sign:

Time Allowed: 2Hrs 15 Mins

Max. Marks: 50

## General Instructions:

- (i) First 15 minutes are allowed only for reading the question paper. Students must NOT start writing during this time.
- (ii) This question paper consists of 3 printed pages.

## FILL IN THE BLANKS:

( 1 x 10 = 10 )

1. Each one of us is \_\_\_\_\_.
2. The \_\_\_\_\_ controls all the other organs of the body.
3. Our brothers and sisters are our \_\_\_\_\_.
4. \_\_\_\_\_ are houses built on wheels.
5. The area around our house is our \_\_\_\_\_.
6. A \_\_\_\_\_ helps us to find direction.
7. We must drink plenty of \_\_\_\_\_ daily.
8. Ballerinas wear \_\_\_\_\_.
9. We build \_\_\_\_\_ to store water.
10. We should drink \_\_\_\_\_ water.

## WRITE TRUE OR FALSE:

( 1 x 10 = 10 )

11. If we drink clean water, we might fall sick. [    ]
12. The Sun rises in the west. [    ]
13. River is a source of water. [    ]
14. There are 24 hours in a day. [    ]
15. We keep money and costly thing in a bank. [    ]

16. We should throw waste into water bodies. [    ]  
 17. We get food from plants and animals. [    ]  
 18. We must eat unhealthy food. [    ]  
 19. A temporary house is built with bricks. [    ]  
 20. As we grow older, our body changes. [    ]

**MATCH THE COLUMN:**

( 1 x 5 = 5 )

21. Compass	a. wears apron and cap
22. Landmark	b. Surface water
23. Cook	c. Direction
24. Lake	d. Maternal grandparents
25. Mother's parent	e. Locate a place easily

**ONE WORD ANSWER:**

( 1 x 5 = 5 )

26. What are arms and legs called together? \_\_\_\_\_  
 27. What tells us exact time? \_\_\_\_\_  
 28. What do astronauts wear? \_\_\_\_\_  
 29. What are permanent houses made of? \_\_\_\_\_  
 30. We get ground water through \_\_\_\_\_

**ANSWER THE FOLLOWING:**

( 2 x 10 = 20 )

31. Write two importance of water in our daily life.

Ans: \_\_\_\_\_  
 \_\_\_\_\_

32. What are the four main directions?

Ans: \_\_\_\_\_  
 \_\_\_\_\_

33. Name four important places we find in our neighborhood.

Ans: \_\_\_\_\_  
 \_\_\_\_\_

34. Mention two ways of saving water in our daily life.

Ans: \_\_\_\_\_

---

---

35. Write two healthy food habits that we should follow.

Ans: \_\_\_\_\_  
\_\_\_\_\_  
\_\_\_\_\_

36. What is cooked food? Give one example. (1 + 1 = 2)

Ans: \_\_\_\_\_  
\_\_\_\_\_

37. What direction does a compass needle always point towards? What is the opposite direction of east? (1 + 1 = 2)

Ans: \_\_\_\_\_  
\_\_\_\_\_

38. What does a home provide us?


Ans: \_\_\_\_\_  
\_\_\_\_\_

39. Name your favorite ways of having fun with family.

Ans: \_\_\_\_\_  
\_\_\_\_\_

40. Which organ helps us to breathe? Which organ helps us to digest our food? (1 + 1 = 2)

Ans: \_\_\_\_\_  
\_\_\_\_\_



# DELHI PUBLIC SCHOOL RAMPURHAT

MID-TERM EXAMINATION  
SESSION: 2024-2025  
SUBJECT: CPMPUTER SCIENCE  
CLASS – II

Name:

Sec:

Roll No:

Invigilator's Sign:

Examiner's Sign:

Time Allowed: 2 Hrs 15 Mins

Max. Marks: 50

## General Instructions:

- (i) First 15 minutes are allowed only for reading the question paper. Students must NOT start writing during this time.
- (ii) This question paper consists of 4 printed pages

## GROUP-A

### A. Fill in the blanks:

(1X5=5)

**Keyboard, Pen drive, Shutdown, backspace, Scrollbar**

- 1) The window will close when you click on the \_\_\_\_\_ button.
- 2) A \_\_\_\_\_ can be carried around easily.
- 3) The \_\_\_\_\_ key on the keyboard is like an eraser for your words.
- 4) The \_\_\_\_\_ is used to scroll up and down on a page or a document.
- 5) We type on a computer using a \_\_\_\_\_.

### B. Tick (✓) the Correct option:

(1X5=5)

- 6) Which device helps us move items on the computer screen?  
a) Pen Drive      b) Printer      c) Mouse      d) Headphone
- 7) Which key helps us type the symbol on the type of a key?  
a) Caps Lock      b) Shift      c) Backspace      d) Delete

8) Which finger is used to click the left button?

- a) Index finger    b) Middle finger    c) Thumb    d) None of these

9) Which device do we use to get a printed copy of a picture from the computer?

- a) Pen Drive    b) Printer    c) Headphone    d) Keyboard

10) What is the use of alphabet keys?

- a) Typing numbers    b) Typing special    c) Typing words    d) Adding spaces between words.

**C. Write T for True and F for False**

**(1X5=5)**

11) A computer is an electronic device.

12) A mouse is a box that stores photos in the computer.

13) Some keyboards have number keys on the right-hand side also.

14) Default mouse pointer is a white arrow with a black border.

15) Computer helps us to play music, videos and games.

**D) Match the Pattern**

**(1X5=5)**

**A**

**B**

16) Left-click

a) Keep holding the left button to do this

17) Right-click

b) Place an object at a new place on the monitor

18) Drag

c) Open a list of options

19) Drop

d) Select an item

20) Scroll

e) Move a page screen up and down.

**GROUP-B**

**E. Short Type Based Questions:**

**(2X9=18)**

21) How computer pollutes the environment?

---

---

---

22) Write two uses of Microphone.

---

---

---

23) Why do we need storage device?

---

---

---

24) What is a pointer on a mouse?

---

---

---

25) Write two advantages of a computer.

---

---

---

26) Write two uses of a mouse.

---

---

---

27) Difference between backspace key and delete key.

---

---

---

28) What is the use of arrow keys?

---

---

---

29) What is left click and double click?

---

---

---

**GROUP-C**

**F.(Long Type Based Questions)**

**(3X4=12)**

30) Write two differences between CD and DVD.

---

---

---

---

---

---

31) How many parts of a mouse? Give examples of special keys.

**(2 +1)**

---

---

---

---

---

---

32) What is an output device? Give two examples of input devices.

**(2 +1)**

---

---

---

---

---

---

33) Why can using computers sometimes be not good?

---


---

---

---

---

---



# DELHI PUBLIC SCHOOL RAMPURHAT

MID-TERM EXAMINATION

SESSION: 2024-2025

SUBJECT: GENERAL KNOWLEDGE

CLASS – II

Name: \_\_\_\_\_ Sec: \_\_\_\_\_ Roll No: \_\_\_\_\_

Invigilator's Sign:

Examiner's Sign:

Time Allowed: 45 Mins

Max. Marks: 25

## SECTION-A

1. Answer the following:

(1x5=5)

1. What does the heart pump?

Ans:

2. How many legs does a butterfly have?

Ans:

3. Who builds hives?

Ans:

4. Who helped Cinderella?

Ans:

5. Which animal is kept in a stable?

Ans:

2. Underline the correct words to complete the sentences:

(1x5=5)

1. (Cactus/Mint) is a spiny plant that grows in the desert.

2. Animals that stay in the forest are known as (domestic /wild) animals.

3. A(tent/cardan) is a house on wheels.

4. The (geyser/inverter) supplies electricity during a power cut.

5. Summer is the (hottest/coldest) season.

**3. Answer the following:**

**(1x5=5)**

1. Two plants that need support to climb.

Ans:

2. Two fruits with many seeds.

Ans:

3. An animal that gives us wool.

Ans:

4. A wild animal with black and white stripes.

Ans:

5. A food that can be eaten raw as well as cooked.

Ans:

**SECTION-B**

**4. Match the landforms to their descriptions.**

**(1x10=10)**

**Column A**

**Column B**

1. The highest point of a mountain

a. waterfall

2. A group of islands

b. oasis

3. A slowly moving river of ice

c. carley

4. Place in a desert that has water and plants

d. plateau

5. A large body of salt water

e. river

6. It is created when a river falls off a cliff steeply

f. beach

7. A flat area of land that is higher than the land around it

g. peak

8. An area of sand and pebbles along a sea shore

h. glacier

9. A 'u' or 'v' shaped landform between hills or mountains

i. archipelago

10. A large flowing body of water that may flow into a sea or ocean

j. ocean